


Labelling

Car


This car is moving forward. Where will you place the forces of: **gravity**, **propulsion**, **air resistance** and **friction**?



Forces


Sky Diver

This sky diver is falling to the ground with his parachute open. Where will you place the forces of: **gravity** and **air resistance**?



Rubber duck

This rubber duck is floating happily in the bath, where will you place the forces of: **gravity** and **upthrust**?



Skier

This skier is skiing down the slope. Where will you place the forces of: **propulsion**, **air resistance**, **gravity** and **friction**?

